

Pro funkci $f(x) = \operatorname{arctg} \frac{x-1}{x-2}$ určete:

a) $D(f)$ a vodorovnou asymptotu

b) tečna a normála v $x_0 = 1$

a)

$$D(f) = \mathbb{R} - \{2\}$$

$$\lim_{x \rightarrow \infty} \operatorname{arctg} \frac{x-1}{x-2} = \operatorname{arctg} 1 = \frac{\pi}{4}$$

$$\lim_{x \rightarrow -\infty} \operatorname{arctg} \frac{x-1}{x-2} = \operatorname{arctg} 1 = \frac{\pi}{4}$$

vodorovná asymptota $y = \frac{\pi}{4}$ pro $x \rightarrow \pm\infty$

b)

$$\begin{aligned} f'(x) &= \frac{1}{1 + \left(\frac{x-1}{x-2}\right)^2} \cdot \frac{1 \cdot (x-2) - (x-1) \cdot 1}{(x-2)^2} = \frac{1}{\frac{x^2 - 4x + 4 + x^2 - 2x + 1}{(x-2)^2}} \cdot \frac{x-2-x+1}{(x-2)^2} = \\ &= \frac{-1}{2x^2 - 6x + 5} \end{aligned}$$

$$f'(1) = \frac{-1}{2-6+5} = \frac{-1}{1} = -1$$

$$\text{t: } y - y_0 = f'(x_0) \cdot (x - x_0)$$

$$\text{t: } y - 0 = -1 \cdot (x - 1)$$

$$\underline{y = 1 - x}$$

$$\text{n: } y - y_0 = -\frac{1}{f'(x_0)} \cdot (x - x_0)$$

$$\text{n: } y - 0 = 1 \cdot (x - 1)$$

$$\underline{y = x - 1}$$

$$f(1) = \operatorname{arctg} 0 = 0$$

Pro funkci $f(x) = \arcsin(x^2)$ určete:

a) $D(f)$, intervaly monotonie a lokální extrémů

b) rovnici tečny a normály v $x_0 = \frac{1}{\sqrt{2}}$

a)

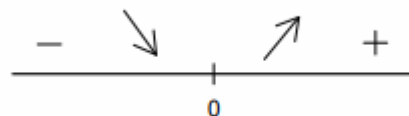
$$D(f) = \langle -1, 1 \rangle$$

$$f'(x) = \frac{1}{\sqrt{1-x^4}} \cdot 2x$$

$$f'(x) = 0 \text{ pro } x = 0$$

rostoucí $\langle 0, 1 \rangle$

klesající $\langle -1, 0 \rangle$



$$f(0) = \arcsin 0 = 0$$

lokální minimum $[0, 0]$

$$f(1) = \arcsin 1 = \sin^{-1} 1 = \frac{\pi}{2}$$

lokální maximum $[1, \frac{\pi}{2}], [-1, \frac{\pi}{2}]$

b)

$$f'\left(\frac{1}{\sqrt{2}}\right) = \frac{2 \cdot \frac{1}{\sqrt{2}}}{\sqrt{1-\frac{1}{4}}} = \frac{\sqrt{2}}{\sqrt{\frac{3}{4}}} = \frac{\sqrt{2}}{\frac{\sqrt{3}}{2}} = \frac{2 \cdot \sqrt{2}}{\sqrt{3}}$$

$$y_0 = f(x_0) = \arcsin \frac{1}{2} = \frac{\pi}{6}$$

$$\text{t: } y - y_0 = f'(x_0) \cdot (x - x_0)$$

$$\text{t: } y - \frac{\pi}{6} = \frac{2 \cdot \sqrt{2}}{\sqrt{3}} \cdot \left(x - \frac{1}{\sqrt{2}}\right)$$

$$\text{n: } y - y_0 = -\frac{1}{f'(x_0)} \cdot (x - x_0)$$

$$\text{n: } y - \frac{\pi}{6} = -\frac{\sqrt{3}}{2 \cdot \sqrt{2}} \cdot \left(x - \frac{1}{\sqrt{2}}\right)$$

Pro funkci $f(x) = \ln \frac{x+1}{1-x}$ určete:

a) $D(f)$

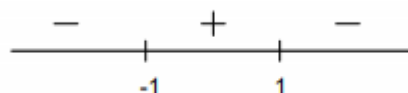
b) lokální extrémů a intervaly monotonie

c) inflexní body a intervaly konvexnosti a konkávnosti

a)

$$\frac{x+1}{1-x} > 0$$

$$D(f) = (-1, 1)$$



b)

$$\begin{aligned} f'(x) &= \frac{1}{\frac{x+1}{1-x}} \cdot \frac{1 \cdot (1-x) - (x+1) \cdot (-1)}{(1-x)^2} = \frac{1-x}{x+1} \cdot \frac{1-x+x+1}{(1-x)^2} = \frac{2}{(x+1) \cdot (1-x)} = \frac{2}{1-x^2} \\ &= 2 \cdot (1-x^2)^{-1} \end{aligned}$$

\Rightarrow nemá extrémů, všude rostoucí, $f'(x) > 0$ v $(-1, 1)$

c)

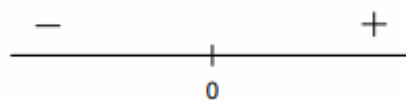
$$f''(x) = -2 \cdot (1-x^2)^{-2} \cdot (-2x) = \frac{4x}{(1-x^2)^2}$$

$$f''(x) = 0 \text{ pro } x = 0$$

konvexní v $(0, 1)$

konkávní v $(-1, 0)$

inflexní bod I $[0, 0]$



Pro funkci $f(x) = e^{\frac{1}{x}}$ určete:

- inflexní body, intervaly konvexnosti a konkávnosti
- vodorovnou asymptotu

a)

$$D(f) = \mathbb{R} - \{0\}$$

$$f'(x) = e^{\frac{1}{x}} \cdot \left(\frac{1}{x}\right)' = -1 \cdot x^{-2} \cdot e^{\frac{1}{x}} = -\frac{1}{x^2} \cdot e^{\frac{1}{x}}$$

$$\begin{aligned} f''(x) &= -1 \cdot (-2) \cdot x^{-3} \cdot e^{\frac{1}{x}} + \left(-1 \cdot x^{-2} \cdot e^{\frac{1}{x}} \cdot (-1) \cdot x^{-2}\right) = \frac{2 \cdot e^{\frac{1}{x}}}{x^3} + \frac{e^{\frac{1}{x}}}{x^4} = \\ &= \frac{(2x+1) \cdot e^{\frac{1}{x}}}{x^4} \end{aligned}$$

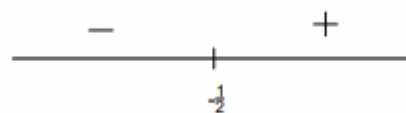
$$f''(x) = 0 \text{ pro } 2x + 1 = 0$$

$$x = -\frac{1}{2}$$

konvexní $\left(-\frac{1}{2}, 0\right) \cup (0, \infty)$

konkávní $\left(-\infty, -\frac{1}{2}\right)$

inflexní bod I $\left[-\frac{1}{2}, e^{-2}\right]$



b)

$$\lim_{x \rightarrow \infty} e^{\frac{1}{x}} = e^0 = 1$$

$$\underline{y = 1} \text{ pro } x \rightarrow \pm\infty$$

$$\lim_{x \rightarrow -\infty} e^{\frac{1}{x}} = e^0 = 1$$

Pro funkci $f(x) = \frac{1}{e^x}$ určete:

- a) inflexní body, intervaly konvexnosti a konkávnosti
- b) vodorovnou asymptotu

a)

$$D(f) = \mathbb{R}$$

$$f'(x) = \frac{-e^x}{(e^x)^2} = -\frac{1}{e^x}$$

$$f''(x) = \frac{e^x}{(e^x)^2} = \frac{1}{e^x}$$

\Rightarrow inflexní body nemá, všude konvexní

b)

$$\lim_{x \rightarrow \infty} \frac{1}{e^x} = 0$$

$$\lim_{x \rightarrow -\infty} \frac{1}{e^x} = \infty$$

vodorovná asymptota $y = 0$ pro $x \rightarrow \infty$

Je daná funkce $f(x) = \frac{e^{3x}}{x^2}$ určete:

- $D(f)$, lokální extrémů a intervaly monotonie
- inflexní body a intervaly konvexnosti a konkávnosti

$$D(f) = \mathbb{R} - \{0\}$$

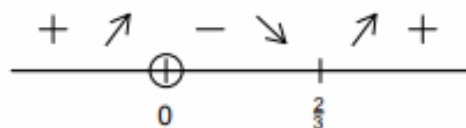
a)

$$f'(x) = \frac{(e^{3x})' \cdot x^2 - e^{3x} \cdot 2x}{x^4} = \frac{3 \cdot e^{3x} \cdot x^2 - 2x \cdot e^{3x}}{x^4} = \frac{e^{3x} \cdot x \cdot (3x - 2)}{x^4} = \frac{e^{3x} \cdot (3x - 2)}{x^3}$$

$$f'(x) = 0 \text{ pro } 3x - 2 = 0 \\ x = \frac{2}{3}$$

rostoucí v $(-\infty, 0)$ a $(\frac{2}{3}, \infty)$

klesající v $(0, \frac{2}{3})$



$$f\left(\frac{2}{3}\right) = \frac{e^{3 \cdot \frac{2}{3}}}{\left(\frac{2}{3}\right)^2} = \frac{9}{4} \cdot e^2 \quad \text{lokální minimum } E\left[\frac{2}{3}, \frac{9}{4} \cdot e^2\right]$$

b)

$$f''(x) = \frac{(e^{3x} \cdot (3x - 2))' \cdot x^3 - (e^{3x} \cdot (3x - 2)) \cdot 3x^2}{x^6} = \frac{(e^{3x} \cdot 3 \cdot (3x - 2) + e^{3x} \cdot 3) \cdot x^3 - (e^{3x} \cdot (9x^3 - 6x^2))}{x^6} = \\ = \frac{e^{3x} \cdot x^2 \cdot (9x^2 - 6x + 3x - 9x + 6)}{x^6} = \frac{e^{3x} \cdot (9x^2 - 12x + 6)}{x^4} = \frac{3 \cdot e^{3x} \cdot (3x^2 - 4x + 2)}{x^4}$$

$$f''(x) = 0 \text{ pro } 3x^2 - 4x + 2 = 0$$

$$D = b^2 - 4 \cdot a \cdot c = 16 - 4 \cdot 3 \cdot 2 = -8 < 0$$

\Rightarrow nemá inflexní body, všude $f''(x) > 0$, všude konvexní $(-\infty, 0) \cup (0, \infty)$